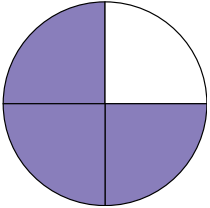


Name: _____

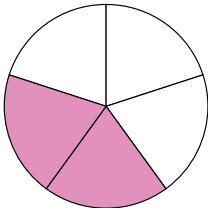
BASIC FRACTIONS

Draw lines to match the fractions:



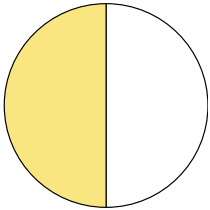
one
whole

$$\frac{1}{1}$$



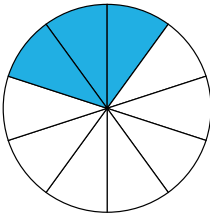
three
quarters

$$\frac{1}{2}$$



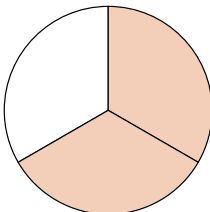
two
thirds

$$\frac{3}{10}$$




three
tenths

$$\frac{2}{3}$$



one
half

$$\frac{2}{5}$$



two
fifths

$$\frac{3}{4}$$

